

STD.I

NAME:-

ROLL NO.

[10 x 1 = 10]

Q.1 Fill in the blanks.

- a. Eighty one can be written in figures as _____.
- b. There are _____ days in a week.
- c. $88 = 8 \text{ tens} + \text{_____ ones}$.
- d. 12, 13, _____, 15, 16, 17.
- e. The number just before 36 is _____.
- f. 21 can be written in words as _____.
- g. $5 + 4 = \text{_____}$.



+

=

₹ _____

i.



j. $10 - 5 = \text{_____}$.

Q.2 Choose the correct answer and fill in the blanks.

(10 x 1 = 10)

- a. _____ is an odd number. (6, 4, 5)
- b. _____ sign is used for addition. (+, -, x)
- c. 61 can be written in words as _____. (Sixty two, Sixteen, Sixty one)
- d. The place of 8 in 18 is _____. (Hundreds, tens, ones)
- e. $\square + \square = 10$
- f. _____ is an even number. (28, 41, 33)
- g. _____ is the twelfth month of the year. (January, December, March)
- h. Fifty four can be written in figures as _____. (45, 54, 66)
- i. Holiday of the week is _____. (Monday, Wednesday, Sunday)
- j. $20 + 8 = \text{_____}$. (28, 24, 21)

(10 x 2 = 20)

Q.3 Solve it.

A] Circle the smallest number.

- a. 25 65 18 84
- b. 44 88 33 96

Q.5 There are five mangoes in one basket and four mangoes in another basket. How many mangoes are there in both the baskets together?

Q.6 There are six pencils in a box. If two of them are used, then find the number of unused pencils.

Q.7 Draw beads to represent the following numbers on the abacus and write the number name.

a) 68

T	O
---	---

Q.8 Add the following.

a. 28

+ 21

b. 44

+ 52

c. 55

+ 23

d. 8

+ 2

e. 12

+ 57

Q.9 Subtract the following.

a. 52

- 41

b. 84

- 43

c. 75

- 32

d. 9

- 1

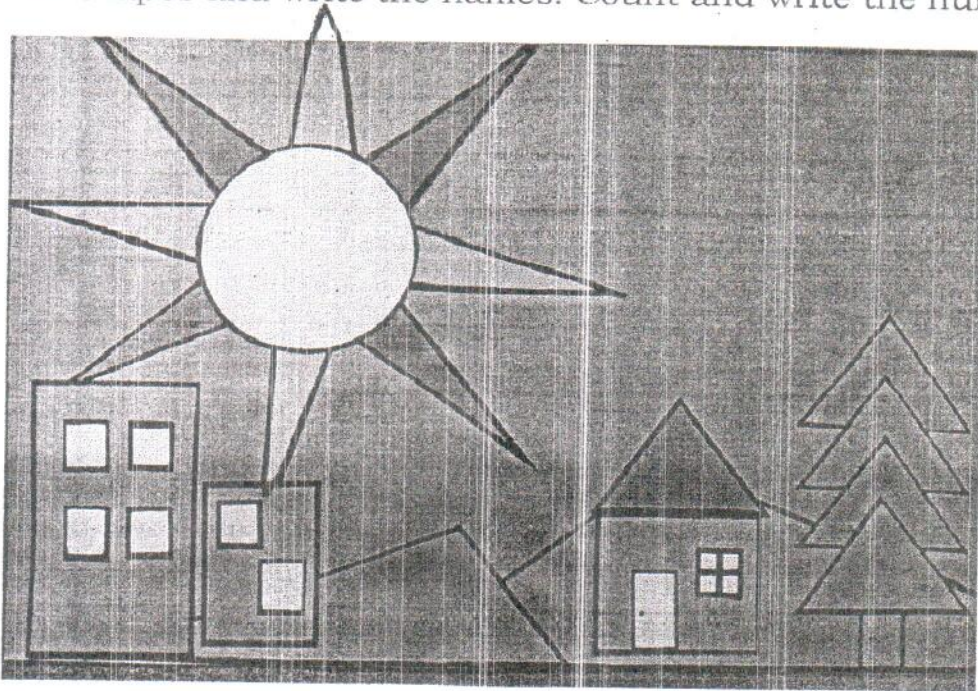
e. 68

- 27

ACTIVITY

(10 X 2=20)

Q.10 Identify the shapes and write the names. Count and write the numbers.



Q.11 Make ₹.55 by using following Notes and coins.



Q.12 Make ₹. 83 by using following Notes and coins



Std: I

Sub:-English

Max. Marks: 100

Name: _____

Roll No.: _____

Q.1) Fill in the blanks with has or have.

[5×1= 5]

1. He _____ a big family.
2. They _____ gone to play.
3. You _____ done this work.
4. Sita _____ curly hair.
5. I _____ nothing to do.

Q.2) Underline the describing words in the following sentences. [4×1= 4]

1. I have a purple sock.
2. He reads funny stories.
3. Seema is a brave girl.
4. We like to eat ripe apples.

Q.3) Rewrite the following sentences using capital letters wherever necessary.

[3×1= 3]

1. raju will go to mumbai.

2. sita and gita were reading.

3. rekha and i went to the market.

Q.4) Rewrite the following sentences using full stop [.] or question mark [?] at the end of the sentence.

[3×1= 3]

1. Arnit is eating food

2. Which is your favourite book

3. She is going to London

Q.4) Fill in the blanks with in, on, under, behind or between. [5×1= 5]

1. The monkey is _____ the tree.




2. The flowers are _____ the basket.



3. The cake is _____ the table.



4. The cat is _____ the chairs.



5. The ladybug is _____ the leaf.



Q.5) Fill in the blanks with this or that. [3×1= 3]

1. _____ is a cat.



2. _____ is an umbrella.



3. _____ is a bottle.



Q.6) Complete the table. [3×1= 3]

Masculine	Feminine
lion	
uncle	
king	

Q.7) Write A or An.

[3×1= 3]

1. _____ animal
2. _____ book
3. _____ ice-cream

Q.8) Complete the table.

[3×1= 3]

Singular	Plural
ring	
watch	
pencil	

Q.9) Underline the action words in the following sentences.

[3×1= 3]

1. Sangeeta is watching a movie.
2. Ram plays cricket.
3. He drives the car nicely.

Q.10) Complete the table.

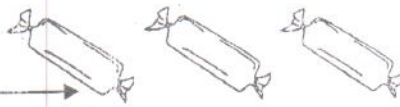
[3×1= 3]

Present	Past
drink	
eat	
get	

Q.11) Fill in the blanks with these or those.

[2×1= 2]

1. _____ are chocolates.



2. _____ are fish.



Q.12) Answer the following questions. [16]

1. What are kept on the glass table? [2]

2. What is Daddy putting up? [2]

3. What would Shirley not share? [1]

4. Where is Alice sitting? [1]

5. What is Meow doing? [1]

6. Name the animals mentioned in the poem, 'Squirrely Shirley'. [1]

7. What colour was the middle of the flower? [1]

8. What happens when Alice takes a bite of cake? [2]

9. What did Mummy do to the plant? [1]

10. What have Rupa and Robin got for Aparna? [2]

11. Where did Jim win a prize for his sunflower? [2]

Q.13) Write the rhyming words for the following words: [3×2= 6]

1. sun: _____


2. man: _____

3. net: _____

Q.14) Observe the picture and fill in the blanks with a, e, i, o, u. [4×1= 4]

1. appl_____ 

2. r_____t 

3. b_____at 

4. k_____te 

Q.15) Look at the picture and rearrange the letters to make meaningful words: (jumbled words)- [4×1= 4]


1. ewb: _____ 

2. upc: _____ 

3. nus: _____ 

4. kobo: _____ 

Q.16) Look at the picture carefully and fill in the blanks. [10]



1. There are _____ people in this picture.

2. A man and a _____ are sitting on a bench.

3. Two boys are playing with a _____.

4. There is a _____ near the swings.

5. A girl and a boy are _____ on the swings.

Q.17) Write the composition on 'Horse'.

[10]

Q.18) Find out the naming words and write them on the flower petals. [10]

Because

Short

For

Rani

Mother


Below

Long

Star

School

Dog



चिन्मय विद्यालय ताटापूर.

एम. आय. डी. सी. एरिया सरावली, बोईसर.

इयत्ता- १ _____ मूल्यांकन - ३ - २०१८ - २०१९. गुण ५०
विषय- मराठी. नाव _____ अनुक्रमांक _____

प्रश्न १) मात्रा नसलेले दोन अक्षरी शब्द लिहा. (३)

१) _____ २) _____ ३) _____

प्रश्न २) मात्रा नसलेले तीन अक्षरी शब्द लिहा. (३)

१) _____ २) _____ ३) _____

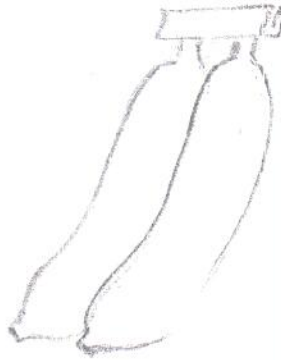
प्रश्न ३) मात्रा नसलेले चार अक्षरी शब्द लिहा. (४)

१) _____ २) _____ ३) _____ ४) _____

प्रश्न ४) चित्र ओळखून योग्य स्वरचिन्हे लावा. (५)




थली




कळ



सैनिक



दुकान

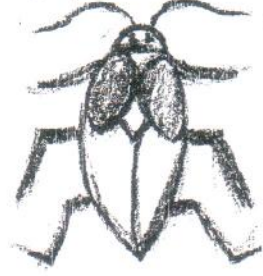


बुक

प्रश्न ५) जीडया जुलवा

१. फुगा

(५)




२. झुटल



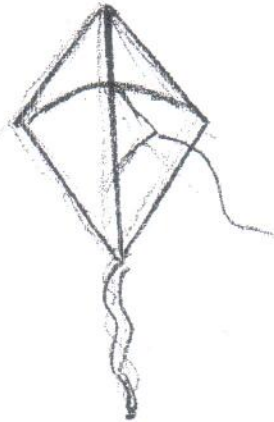
३. पतंग



४. तराजू



५. विमान



प्रश्न ६) (i) आ चे स्वरचिन्ह लावा.

(५)

१) हु त २) म सा ३) व चा

४) राज ५) न क

प्रश्न ७) 'उ' (उ) चे स्वरचिन्ह लावा.

(५)

१) मला २) बाहली ३) पजारी

४) दकान ५) तलस

प्रश्न ८) अंकात लिहा.

(५)

१) दोन - २) पाच - ३) सात - ४) नऊ - ५) तीन -

प्रश्न ९) अक्षरात लिहा.

(५)

१) १० - २) ६ - ३) १ - ४) ८ - ५) ४ -

प्रश्न १०) 'अँ' (ँ) चे स्वरचिन्ह लावा.

(५)

१) बट २) हलो ३) कट

४) रट ५) मट

प्रश्न ११) (अं) चे स्वरचिन्ह लावा.

(५)

१) पतंग २) अगठी ३) सुदर

४) जगल ५) गगा

चिन्मय विद्यालय, तारापुर
एम. आ. डी. सी. एरिया सरावली
मूल्यांकन ३ (२०१८-१९)

कक्षा - पहली
विषय - हिंदी

नाम : _____

पूर्णांक १००
अनुक्रमांक

प्र.१) निम्नलिखित शब्दों में से उचित शब्द चुनकर लिखिए।

१०

- १) लालू ने झट _____ खाया। (शक्कर / गुड़)
- २) वह _____ के कारखाने में गया। (रॉकेट / पतंग)
- ३) _____ गया नाई के पास। (नाई / चूहा)
- ४) मुझे एक _____ मिला। (केंचुआ / बत्तख)
- ५) मैं _____ खोद रहा हूँ। (मिट्टी / गड्ढा)
- ६) वह _____ लगा। (हँसने / रंने)
- ७) चलते - चलते _____ होने लगा। (रात / अँधेरा)
- ८) अब _____ ही नहीं बची। (हाथ / पूँछ)
- ९) देखो मैं _____ रहा हूँ। (तैर / खा)
- १०) _____ भी भागा। (लालू / पीलू)

प्र.२) निम्नलिखित प्रश्नों के उत्तर लिखिए।

१५

१) अंत में चूहे की कितनी पूँछें बची ?

२) लालू के गुड़ खाने से क्या ठीक हो गया था ?

३) बत्तख का बच्चा कहाँ जा रहा था ?

४) चाँद पर क्या नहीं था ?

५) मुर्गी के चूजों का क्या नाम था ?

प्र. ३) निम्नलिखित प्रश्नों के उत्तर एक शब्द में लिखिए |

- १) चूहे की पूँछ किसने काटी ? _____
२) लालू की क्या जलने लगी ? _____
३) चूजे को किसने पानी से बाहर निकाला ? _____
४) हलीम वापिस कहाँ जाना चाहता था ? _____

प्र. ४) निम्नलिखित शब्दों में से द्वित्व व्यंजन शब्दों को गोला लगाइए |

१) पत्र	मक्का	
२) अम्मा	ज्ञान	राम
३) बादल	नाचना	लाल
४) कक्षा	पत्ता	बच्चा
५) लट्ठू	नन्हा	पानी
६) फूल	नीला	हाथी
७) गाजर	मुन्ना	बत्तख
		पेड़

प्र. ५) निम्नलिखित गिनती को अंकों व अक्षरों में लिखिए |

- क) ११ _____ ख) सोलह _____ ग) १३ _____
घ) बारह _____ ड) १८ _____ च) बीस _____

प्र. ६) सही मिलान कीजिए |

१) क्ष	ज्ञान
२) त्र	श्रम
३) ज्ञ	कक्षा
४) श्र	त्रिशूल

प्र. ७) क) निम्नलिखित क्रिया-शब्दों पर गोला बनाइए |

१) मामा	चलना	किताब	२) रोना	रात	हरा
३) सीता	पढ़ना	शक्कर	४) भाई	नहाना	कप
५) देखना	पेंसिल	रेशमा	६) खाना	तारा	पेड़

ख) निम्नलिखित विशेषण शब्दों के द्वारा खाली जगह भरिए | [हरा , मीठी , कड़वा , चटपटा , काला , तीखी]

१) _____ करेला	२) _____ मिर्च
३) _____ पेड़	४) _____ कौआ
५) _____ बरफ़ी	६) _____ अचार

ग) निम्नलिखित वाक्यों में से सर्वनाम शब्द छाँटकर लिखिए |

- १) यह पुस्तक है | _____ २) वह एक अच्छी लड़की है | _____
३) हम घूमने जाएँगे | _____ ४) उसका नाम क्या है ? _____
५) मैं खाना खा लूँगा | _____ ६) तुम पढ़ाई करो | _____

प्र. ९) नीचे दिए गए चित्र को देखकर पूछे गए प्रश्नों के उत्तर लिखिए।



- १) बगीचे में _____ बच्चे खेल रहे हैं।
- २) लड़की _____ झूल रही है।
- ३) बच्चा फुटबॉल से _____ रहा है।
- ४) बगीचे में _____ पेड़ हैं।
- ५) पौधे में _____ फूल हैं।

Q.1 Fill in the blanks.

[5X2=10]

1. _____ are very small animals.
2. We must _____ our teeth every day before having breakfast.
3. An igloo is a house made from blocks of _____ or _____.
4. The _____ of plants grow into fruits.
5. While crossing the road, we must use the _____.

Q.2 Choose the correct answer and fill in the blanks.

[10x1=10]

1. A house protects us from heat, cold and _____. [rain, milk, juice]
2. We must rinse our mouth after every _____. [comb, meal, bath]
3. At home, we must not play with _____ objects.
[soft, sharp, rough]
4. Trees have strong, thick stems called _____. [trunks, herbs, roots]
5. _____ are animals that can fly. [fish, birds, pets]
6. A houseboat floats on _____. [land, water, air]
7. We must comb our _____ neatly. [mouth, hair, head]
8. We must not lean out of a _____ vehicle.
[standing, waiting, moving]
9. Shrubs have thin and hard _____. [stems, flowers, fruits]
10. _____ have six legs. [birds, insects, animals]

Q.3 Name the following.



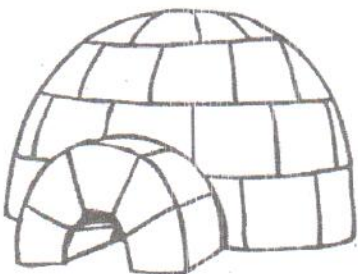
[5x2=10]



1. A house that is pulled by animal or an engine _____.
2. They have feathers on their body _____.
3. They grow only for one season _____.
4. Underground paths to help people cross the road are called _____.
5. They are weak plants and they need support to stand straight _____.

Q.4 Identify the following pictures and write their names from the bracket.

[5x2=10]

(Igloo, Lotus, Rhinoceros, Giraffe, Coconut Tree)





Q.5 Answer the following questions.

[5x2=10]

1. What do plants need to live and grow?

Ans:-

2. Name the materials used to build a house.

Ans:-

3. What are safety rules?

Ans:-

4. Why should we keep our body clean?

Ans:-

5. How are fruits useful to us?

Ans:-

Q.6 Answer the following questions.

1. Classify the following plants in their respective group.

[Banyan, Watermelon, Tulsi, Coriander, Muskmelon, Mint]

Herbs	Shrubs	Tree	Creepers

2. Name the following:

a. Two Climbers :- _____

b. Two Flowers :- _____

c. Two Wild Animals :- _____

3. Draw any two road signs.

--	--

4. Draw any three things we use to clean our body parts and name them.

--	--


5. Write any three safety rules that we must follow.

Ans:- _____


Activity

[20 marks]

A] Draw a traffic signal. Colour it correctly and write what each colour says.



B] Draw any Five fruits and name them.



CHINMAYA VIDYALAYA TARAPUR
P-201, MIDC.Indl.Area, Saravali, Boisar.
Evaluation - III (2018-2019)

Std: I _____

Sub:-Value Education

Marks: 25

Roll No: _____

Name: _____

Q.1 Choose the correct word from the bracket and fill in the blanks. [5x2=10]

- a) The earlier name of Valmiki was _____. [Patnakar/ Ratnakar]
b) Animals never forget the _____ you give them. [kindness/rudeness]
c) Learn to _____ the children. [love/hate]
d) _____ are those who live near you. [Neighbours/Relatives]
e) Guard _____ look after homes. [cats/dogs]

Q.2. Fill in the blanks:-

[5x1=5]

- a) _____ was the guru of Pandavas and Kauravas.
b) Animals can be your best _____ if you love them.
c) We must be _____ and _____ to our neighbour.
d) We should never write on _____.
e) _____ was the name given to the chapters of Mahabharata.

Q. 3. Match the following:-


[5x1=5]

- | | |
|--------------------------------|-------------------------------|
| a) Respect | • pull carts. |
| b) Earlier name of Mahabharata | • creator of the whole world. |
| c) Donkeys | • Shakuni. |
| d) God | • our elders. |
| e) Maternal uncle of Kauravas | • Jaya |

Q. 4. State True or False :-

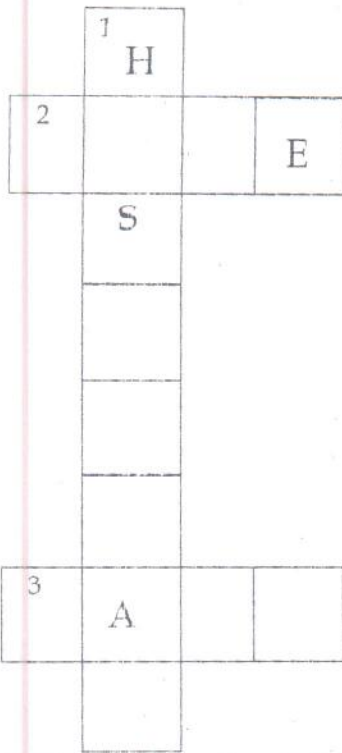
[5x1=5]

- a) We should be kind to animals. _____
b) We must love only our family. _____
c) We must disturb elders. _____
d) Animals are true friends. _____
e) Elephants pull heavy bags of school. _____



Q-4) Complete the word grid by using the clues given below.

[1/2 x 10=5]



Down:

1. Computers are used here for doing medical tests in _____.

Across:

2. Computers are used at _____ for playing games.

3. Computers are used in _____ to take out money from ATMs.

Q-5) Answer the following questions.

1. Name two animated cartoons made with the help of computers. [2]

2. What is the full form of ATM? [2]

3. Name the features of a computer. [2]

4. What are the uses of computer? [3]

5. Write any three components of MS Paint window. [3]

6. What is MS-Paint? [3]

7. Write two uses of a computer in hospitals. [3]