

CHINMAYA VIDYALAYA TARAPUR

P-201, MIDC Indl. Area, Saravali, Boisar.

Evaluation - III - 2018 - 2019

Sub: Mathematics

Std: III

Name: _____

Marks: 100

Roll No.: _____

[10 X 1 = 10]

Q.1] Fill in the blanks.

- a) 32 l 157 ml = _____ ml
- b) Rs 28.00 + Rs 192.80 + Rs 7.06 = _____
- c) 9:30 in the night = _____.
- d) A part of whole or a collection is called _____.
- e) 25000 gm = _____ kg
- f) A number is multiplied by 4 and the result is 36. The number is _____
- g) $\frac{2}{8} + \frac{3}{8} =$ _____
- h) $413 + 221 + 100 =$ _____
- i) $\frac{3}{12} = \frac{\quad}{36}$
- j) Fractions with different denominators are called _____.

Q.2] Choose the correct answer and fill in the blanks.

[10 X 1 = 10]

- a) A rectangle has _____ corners. (5 , 4 , 6)
- b) 7kg 360 g = _____. (7360 g, 736 g, 7000g)
- c) Ninety-two paise = _____ (Rs. 1.92 , Rs. 92 , Rs. 0.92)
- d) Quarter past 6 in the evening- _____. (6:15 pm, 6:45 pm , 5:45pm)
- e) The _____ number which when divided by 5 gives 7 as a quotient and 1 as remainder. (36, 32, 48)
- f) Which even number will come before 25? _____ (24, 28, 26)
- g) $172\text{kg} + 37\text{kg} =$ _____. (209 kg, 342 kg, 123 kg)
- h) Solid figures are also called _____ (2-D figures, 3-D figures, Faces)
- i) $\frac{7}{16} + \frac{8}{16} =$ _____. ($\frac{15}{16}$, $\frac{13}{16}$, $\frac{12}{16}$)
- j) $75\text{p} \div 5 =$ _____. (15, 20, 14)

[10 X 2 = 20]

Q.3 Solve

Q. I. Convert.

- a) 52 m 34 cm into centimetres.

Q.II. Multiply

a) $56 \text{ kg } 32 \text{ g} \times 6$

Q. III. Subtract the following.

a) $15 \text{ hrs } 37 \text{ min} - 8 \text{ hrs } 11 \text{ min}$

Q.IV Divide and write the amount in words.

a) $\text{Rs } 35.35 \div 7$

Q.V. Write the following fraction in ascending order.

a) $\frac{3}{16}$, $\frac{5}{16}$, $\frac{12}{16}$, $\frac{10}{16}$, $\frac{8}{16}$.

b) $\frac{4}{8}$, $\frac{5}{8}$, $\frac{1}{8}$, $\frac{2}{8}$, $\frac{6}{8}$.

Q.VI. Write the fraction for each of the following.

N-Numerator, D-Denominator

a) $N=15; D=30$ _____

b) $N=7; D=19$ _____

Q.VII. Add 8kg 624gm nine times and find the result.

Q. VIII. Solve

a) $852g + 567g + 61g$

Q.IX. a) Convert into grams.

1) $36 \text{ kg} -$

b) Find the product.

1) $132 \text{ ml} \times 5$

Q. X. Write the following in words.

a) $\text{Rs } 71.24 -$

b) $\text{Rs } 130.89 -$

Q.4 Solve

[8 X 5 = 40]

a) A shopkeeper purchased 80 kg of sugar. If he had sold 62 kg 860 gm of sugar, then how much sugar is left in the shop?

b) Seema bought books worth Rs 178.75 from a shop. She gave the shopkeeper Rs 200.00. How much would Seema have got back from the shopkeeper as change?

c) Prinal travelled 63 km 150 m in 3 days. If she travelled an equal distance each day, how much did she travel in one day?

d) Each box of Oranges cost Rs 120.35. How much will Pratik have to pay if he buys 9 such boxes?

e) How much juice will a bottle contain if 5 glasses are poured into it and each glass can hold 3150 ml of juice?

e) Write the multiplication table of 15.

f) Solve:-

i) $\frac{56}{60} - \frac{45}{60}$

ii) $\frac{35}{40} + \frac{15}{40}$

h) 15 kg 355 g of rice is equally packed in 5 packets. How much rice does each packet hold?

Activity



(20 marks)

1. Draw a clock for the given time:

[5]

a) 6:15

b) 11:50



b) Draw a line segment and name it and write their measurement:-

[8]

1. 7 cm

2. 5 cm

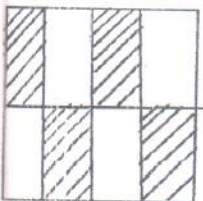
3. 8 cm

4. 6 cm

Q2. Write the fraction of the shaded portion :-

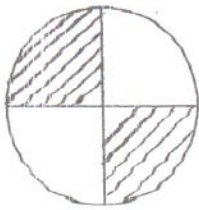
[2]

1)



= _____

2)



= _____

Q3. Use the pictograph given below to answer the questions that follow:

[5]

Number of Chocolates in each one's Bag.	
Suman	
Lata	
Janhvi	
Teena	
Mona	
Each stands for 1 Chocolate	

1) Who has the maximum number of chocolates?

2) Who has the minimum number of chocolates?

3) How many chocolates are there in all?

4) Who has more chocolates, Mona or Teena ?

5) How many chocolates Lata has?

CHINMAYA VIDYALAYA TARAPUR
P-201, MIDC. Indl. Area, Saravali, Boisar.
Evaluation - III (2018-19)
SUBJECT: - English

STD: - III - _____
NAME: - _____

Marks- 100
Roll No: - _____

SECTION - A [READING]

A. Read the following passage carefully and answer the questions that follow. [10]
It was a hot summer day. A fox was feeling very thirsty. He went about in search of water, but could not find it. At last, he reached near a well. He peeped into it. There was some water in the well. The fox jumped into the well. He drank water. Then he tried to come out. But the well was too deep for him to jump out.

By chance a goat passed by. She saw the fox in the well. She said to the fox, "What are you doing in the well?" The cunning fox replied, "It is hot outside. But it is very cool here. The water is also very sweet. Please come down and taste it."

The foolish goat agreed to the fox and jumped into the well. The fox at once stood on the goat's back. He jumped out of the well quite easily. The poor foolish goat was left in the well.

1. Why did the fox search for water? [2]

2. Where did the fox find water? [1]

3. Who came to help the fox? [1]

4. Write the antonyms of the following words from the passage. [2]

(i) far x _____ (ii) shallow x _____

5. Write the synonyms of the following words from the passage. [2]

(i) hop - _____ (ii) answered - _____

6. Write the homophones of the following from the passage. [2]

(i) buy - _____ (ii) hear - _____

SECTION - B [GRAMMAR & WRITING]

B.1. Underline the subject and circle the predicate in the following sentences.[2]

1. Neeta helps her mother in the kitchen.

2. The dog barked at the boy.

B.2. Complete the verb table. [2]

	V ₁	V ₂	V ₃
1.	leave		
2.		spoke	

B.3. Fill in the blanks with articles. [3]

1. Rajni is _____ engineer.

2. Iron is _____ useful metal.

3. Birds fly in _____ sky.

B.4. Rewrite the following sentences using proper punctuation marks. Also use capital letters wherever necessary.

[3]

1. Why is reema sad

2. how handsome he looks

3. Kirans mother is ill

B.5. Fill in the blanks with simple future tense form of the verbs given in the brackets.[4]

1. Veenita _____ in the concert. [*perform*]

2. He _____ my ticket to London. [*book*]

3. The maid _____ tomorrow. [*not come*]

4. If you disturb the dog, it _____ you. [*bite*]

B.6. Underline the adverbs and write in the given space.

[4]

1. The aeroplane took off smoothly.

2. Finally, he could solve the puzzle.

3. I climbed the mountain easily.

4. He was deeply worried about his result.

B.7. Fill in the blanks with suitable pronouns.

[4]

1. _____ enjoyed very much at the party.

2. My uncle gifted a laptop to _____.

3. Mrs. Radha is our teacher. _____ teaches us English.

4. This is a neem tree. Do not cut _____.

B.8. Fill in the blanks with suitable conjunctions.

[4]

1. Walk fast _____ you will miss the bus.

2. He reached late to the office _____ he missed the bus.

3. Eena, Meena _____ Teena have gone to school.

4. Maria tried hard _____ missed the aim.

B.9. Fill in the blanks with suitable prepositions.

[4]

1. We wished him _____ his birthday.

2. I saw a rainbow _____ the sky.

3. They went to Shimla _____ train.

4. April comes _____ March.

B.10. Correct the sentences.

[5]

1. She will wrote a letter.

2. Birds billed nests in the trees.

3. My grandfather read newspaper daily.

4. He left Mumbai in Wednesday.

5. Mona stood first in his class.

B.11. Translate the following sentences into English.

[5]

१. घोड़ा तेज़ दौड़ता है |

२. मोहन शाम को खेलेगा |

३. यह मेरा घर है |

४. कीता गाना गा रही है |

५. वह हमारे साथ आएगी |

B.15. You are Runa/Roshan. Send an email to your friend Swapan inviting him to spend a few days with you after the Annual examination.

[6]

C.2. Make meaningful sentences using the following words.

[3]

1. desire - _____

2. competitor - _____

3. unfairly - _____

C.3. Answer in one word which means the following.

[3]

1. follower - _____
2. repairing - _____
3. enjoyable - _____

C.4. Answer the following questions:

1. What did Dronacharya ask Eklavya to do?

[3]

2. Why was the poor woman happy when she got home?

[3]

5. Why couldn't Eklavya become Dronacharya's disciple?

[3]

6. What work did the poor woman have to do?

[3]

3. What was the work of the mice?

[2]

4. Why does the poet love the cow?

[2]

C.6. Complete the lines of the poem.

[5]

And the masts were made of gold.

The captain was a duck

ACTIVITY

Circle the feminine form of the given nouns from the grid below and write in the given space.

tiger bull monk prince fox gander horse lion God uncle

[10]

V	T	C	L	K	I	N	G	S	E	F	A	N	D
G	O	O	S	E	B	L	Y	M	A	J	I	G	V
O	Q	Z	X	D	N	I	L	A	J	M	U	H	I
D	W	I	T	C	R	A	P	R	I	N	C	E	X
D	U	C	K	L	I	N	G	E	R	A	T	E	E
Y	A	O	W	A	V	L	A	N	U	T	Y	D	N
A	B	W	D	B	E	P	R	I	N	C	E	S	S
F	O	R	K	G	R	R	O	R	I	N	L	T	O
H	Y	L	I	O	N	E	S	S	G	H	A	F	G
E	K	I	J	B	H	D	E	F	S	O	N	U	O
A	I	L	P	B	S	G	D	A	A	R	U	N	D
T	I	G	R	E	S	S	R	I	U	S	N	N	D
J	T	E	A	S	A	H	E	R	N	E	P	Y	E
I	E	X	B	S	T	E	S	Y	T	B	S	F	S
A	L	B	E	C	A	U	S	E	D	E	G	J	S

1. _____
2. _____
3. _____
4. _____
5. _____

6. _____
7. _____
8. _____
9. _____
10. _____

चिन्मय विद्यालय वाराणसी

एम. आय. जी. सी. छटिया सारावली, बोईसर.

मूल्यांकन - ३ २०१८-२०१९.

उपनाम ३ _____

गुण ५०

विषय मराठी. नाव _____

अनुक्रमांक

प्रश्न १. विरुद्धार्थी शब्द लिहा. (नंतर, खडे, निदा, नवा, ओली) (५)

१. कोरडी _____ २. जुना _____
३. स्तुती _____ ४. शहर _____
३. आधी _____

प्रश्न २ खालील शब्दांचे मराठीत अर्थ लिहा. (मंदिर, मित्र, वंदन, पुष्प, पोषाख) (५)

१. temple _____ २. salute _____ ३. friend _____
४. flower _____ ५. dress _____

प्रश्न ३. वचन बदला (गाणे, आसने, झाडे, फूल, दारे) (५)

१. झाड _____ २. दार _____
३. आसन _____ ४. गाणी _____ ५. फुले _____

प्रश्न ४) ठिकाण्या जागा भरा. (आषाढ, मुंबादेवी, शिष्य, उदानपणाची, याज्ञवल्क्य) (५)

- १) मुंबईचे नाव _____ या देवीवरून पडले.
२) _____ पीर्णिमा म्हणजे गुरुपीर्णिमा.
३) जनक राजाचे गुरु _____ होते.
४) कर्ण हा परशुराम यांचा _____ होता.
५) श्रीकृष्णाने कर्णाच्या _____ स्तुती केली.

प्रश्न ५) लिंग बदला, योग्य ठिकाणी (तो , ती , ते) लावा .

(५)

- १) _____ भाकरी २) _____ देवी ३) _____ तेज ४) _____ लढा ५) _____ दिवा

प्रश्न ६. कवितेच्या ओळी पूर्ण करा.

(५)

- १) एक _____ लावू मित्रा, (रोप, वृक्ष, झाड)
२) त्याला _____ घालू. (पाणी, दूध, सरबत)
३) _____ झाल्यावर त्याच्या : (छोटे, मोठे, लहान)
४) _____ खेळू. (खाली, उन्हात, सावलीत)
५) मोठे झाल्यावर _____ ओंजळीत भरू. (फळे, फुले, पाने)

प्रश्न ७) योग्य ठिकाणी अनुस्वार द्या .

(५)

- १) चेडू २) निवात ३) अघोळ ४) अपग ५) परपरा

प्रश्न ८) प्रश्नांची उत्तरे लिहा.

१) गुरूंच्या घरी कौणी लाकडे वाहिली?

(१०)

२) नवजात बालकाची प्रथम गुरू कोण असते?

३) महाराष्ट्र राज्याची राजधानी कोणती आहे?

४) कौरवी लाकडे का मिळाली नाहीत ?

५) फळे कशी आहेत?

प्रश्न ९) "शेतकरी" या विषयावर वाक्यरचना लिहा .

(५)

कक्षा - तीसरी
विषय: हिंदी

१०

प्र.१) निम्नलिखित खाली स्थान भरिए।

(दर्द, नीम, गोद, सवार, चक्की, बाजार, खतरनाक, नारियल, बाहर, सड़क)

१) तुम लोगों की क्यों और कैसे में तो मेरी _____ ही बंद हो जाएगी।

२) तब तक गुरुजी साइकिल पर _____ फुर हो चुके हैं।

३) नमस्ते ! ज़रा _____ जा रहा हूँ।

४) साँप बहुत _____ होता है।

५) वह चट मुझे _____ में उठाकर बाहर भागे।

६) एक बूढ़ा आदमी _____ निकला।

७) तब तक मेरी उँगली का _____ जा चुका था।

८) पेड़ _____ का भी अच्छा होता है।

९) गरम - गरम धूप में वे _____ पर चलते चले गए।

१०) मैं _____ का पानी पी सकता हूँ।

प्र.२) निम्नलिखित कविता की पंक्तियाँ पूरी कीजिए।

१) नाक सभी की _____
सुकड़ी सब की _____ गई।

२) एक चव्वनी फेंक और _____
कुजड़िन से बोला बेचारा ज्यों - त्यों _____

प्र.३) निम्नलिखित शब्दों का वाक्य में प्रयोग कीजिए।

१) रोटी - _____

२) गायब - _____

३) केला - _____

प्र.४) किसने, किससे कहा ?

१) बड़ी भूख लगी है। _____ ने _____ से कहा।

२) नानी देखो, मैंने साँप पकड़ा है। _____ ने _____ से कहा।

३) गुरुजी नमस्ते ! किधर चले ? _____ ने _____ से कहा।

४) अब बच्चा खतरे से बाहर है। _____ ने _____ से कहा।

प्र.५) निम्नलिखित प्रश्नों के उत्तर लिखिए।

१) गुरुजी कहाँ जा रहे थे ?

१५

२) बड़े भाई को कौन-सा पेड़ पसंद आया ?

३) बच्चे को किसने काटा था?

४) गुरुजी को साइकिल किसने दी थी ?

५) बच्चे ने अहाते में क्या देखा ?

प्र.६) उचित क्रिया शब्द लिखकर वाक्य पूरे कीजिए।

- १) आर्यन टी.वी. _____ रहा है। (पढ़ / देख)
२) कोयल आम के पेड़ पर _____ है। (बैठी / लेटी)
३) अध्यापक छात्रों को _____ रहे हैं। (सुला / पढ़ा)
४) दक्ष जल्दी -जल्दी _____ रहा है। (सो / खा)
५) बगीचे में फूल _____ रहे हैं। (खिल / मिल)
६) माँ कपड़े _____ रही है। (धो / खा)

प्र.७) वाक्यों को शुद्ध करके फिर से लिखिए।

१) आकाश में से बिजली चमक रहा है।

२) तुम्हारे को मेरे से क्या काम है ?

३) तुम लोग यहाँ क्यों बैठा हुआ हैं?

४) कल मेरे मामा जी आई थी।

५) खरगोश घास में छिपी थी।

प्र.८) निम्नलिखित वाक्यांशों के लिए एक शब्द लिखिए। (जलचर, बलवान, अमर, मूर्तिकार, सत्यवादी, शिक्षक) ६

- १) जिसमें बल हो - _____
२) जो सदा सत्य बोले - _____
३) शिक्षा देनेवाला - _____
४) जो कभी न मरे - _____
५) जल में रहनेवाला - _____
६) मूर्ति बनाने वाला - _____

प्र. ९) गिनती को अंकों और अक्षरों में लिखिए।

५

- १) ५५ - _____ २) चौंसठ - _____ ३) अठावन - _____
 ४) ७० - _____ ५) अस्सी - _____

प्र. १०) मुहावरों के अर्थ लिखिए। (प्रसन्न होना, शाबासी देना, मूर्ख बनाना)

३

- १) उल्लू बनाना - _____ २) नाच उठना - _____
 ३) पीठ थपथपाना - _____

प्र. ११) सही (✓) या गलत (×) लिखिए।

५

- १) ईद पर सेबइयाँ खाई जाती हैं।
 २) रक्षाबंधन के त्योहार पर पटाखे जलाते हैं।
 ३) वीरवार को गुरुवार भी कहते हैं।
 ४) गाँधी जयंती १४ नवंबर को मनाई जाती है।
 ५) क्रिसमस २५ दिसंबर को मनाया जाता है।

प्र. १२) निम्नलिखित अपठित गद्यांश को पढ़कर प्रश्नों के उत्तर लिखिए।

१०

हमें व्यायाम के नियमों पर ध्यान देना चाहिए। इनकी उपेक्षा करने से हानि की संभावना रहती है। भोजन के बाद व्यायाम नहीं करना चाहिए। व्यायाम के बाद जलपान आवश्यक है। सदैव शक्ति के अनुकूल ही व्यायाम करना चाहिए। अधिक व्यायाम करने से शक्ति क्षीण होती है। खेल और व्यायाम का स्थान स्वच्छ और हवादार होना चाहिए। सभी को अपनी क्षमतानुसार व्यायाम करना चाहिए। सादा सात्विक भोजन, दूध, शाक और फलाहार स्वास्थ्य वृद्धि में उन्नति करते हैं।

१) हमें किस पर ध्यान देना चाहिए ?

२) व्यायाम कब नहीं करना चाहिए ?

३) अधिक व्यायाम करने से क्या होता है ?


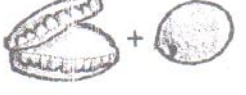



४) व्यायाम के नियमों की उपेक्षा करने से हमें क्या हो सकता है ?

५) खेल और व्यायाम का स्थान कैसा होना चाहिए ?

प्र. १३) क्रियाकलाप - चित्रों से संबंधित मुहावरा लिखिए।

१०

(दाँत खट्टे करना, आँखों का तारा, अंधे की लकड़ी, नौ- दो ग्यारह होना, घी के दीये जलाना)

	+	=	_____		+	=	_____
	+	=	_____		+	=	_____
					+	=	_____

प्र.१४) वाक्यरचना लिखिए |

“ पीपल का पेड़ ”

५

१)

२)

३)

४)

५)

६)

७)

८)

९)

१०)

प्र.१५) जूते खरीदने के लिए रुपए माँगते हुए माता जी को पत्र लिखिए |

५

A series of horizontal lines for writing, typical of a notebook page.

Std: III Div- _____

Name: _____

Marks -50
Roll No. _____

Q.1 Answer the following questions :-

[20×1=20]

1) Who was the first Prime Minister of Independent India?

2) Which film was all about the life of a super hero family?

3) Which city is known as the Silicon Valley of India?

4) Which is the festival of lights in India?

5) Which is the largest bay in the world?

6) Which state has the largest area?

7) Who was the First Female Indian Astronaut?

8) Who invented the Telephone?

9) How many states does India have?

10) Who is the Finance Minister of India?

11) Who is the Defence Minister of India?

12) Who was the first Indian to have won the Nobel price?

13) Where is the Ajanta Caves situated?

14) Who was the First female Governor of an Indian state?

15) What is the name of our galaxy?

16) What is lightning made of?

17) Who was the First man to walk on the moon?

18) Which Indian state is known for its wonderful beaches?

19) Who was the first and only Women Prime Minister of India?

20) Which state is known as God's own country'?

Q.2 Chose the correct option :-

[10×1=10]

- 1) Which of the following would you call if somebody stole your bag or wallet?
a) Police b) Ambulance c) Life guard
- 2) How many players are there in a basket ball team?
a) Six b) Five c) Eight
- 3) What is the another name for table tennis?
a) Tennis b) Ping pong c) Lawn tennis
- 4) Which of these is called the brain of the computer?
a) RAM b) ROM c) CPU
- 5) How many feathers are there in a shuttle cock?
a) Twelve b) Fourteen c) Sixteen
- 6) What does WWW stand for?
a) World wide web b) Wide word web c) World web wide
- 7) Which of these emergency services would you call if the cooker/stove at home is on fire?
a) Life guard b) Fire brigade c) Ambulance
- 8) What do you call the study of space?
a) Astronomy b) Biology c) Botany
- 9) Where would you find the famous Dal Lake?
a) Kashmir b) Chandigarh c) Jaipur
- 10) In cricket how many balls does an over have?
a) Four b) Five c) Six

Q.3 Name the musical instruments related with the following musicians :-

[5×1=5]

- 1) Pandit Ravi Shankar _____
- 2) Ustad Zakir Hussain _____
- 3) Pandit Shivkumar Sharma _____
- 4) Ustad Amjad Ali Khan _____
- 5) Pandit Hari Prasad Chaurasia _____

Q.4 Name the following :-

[5×1=5]

- 1) Tallest building in the world _____
- 2) Largest desert of India _____
- 3) Largest ocean _____
- 4) Tallest mountain in the world _____
- 5) Longest river in the world _____

Q.5 Name the sports with which following famous sports personalities are associated :-

- 1) Novak Djokovic _____
- 2) Kobe Bryant _____
- 3) Michael Clarke _____
- 4) Vladimir Kramnik _____
- 5) Wayne Rooney _____

[5×1=5]

Q.6 Write the capital of the following states :-

[5×1=5]

- 1) Karnataka _____
- 2) Jammu and Kashmir _____
- 3) Bihar _____
- 4) Andhra Pradesh _____
- 5) Maharashtra _____

Q. 1) Fill in the blanks:

[10x1=10]

1. _____ guard our house.
2. Houses are made with _____ roof in hilly areas.
3. ISD stands for _____.
4. _____ are made of snow blocks.
5. In _____ building, there are many houses.
6. _____ is the ship of the desert.
7. _____ gives honey and wax.
8. Nylon is an _____ fibre.
9. Phone call comes via _____ media.
10. Two children born at the same time from the same parents are called _____.

Q.2) Choose the correct option and fill in the blanks: -

[10x1=10]

1. _____ is the king of the jungle.
(Tiger, Elephant, Lion)
2. _____ are living things.
(Plants, Stars, Table)
3. _____ is one of the means of non-verbal transport.
(Fax, Telephone, Mobile phone)
4. _____ fibres are obtained from plants and animals.
(Artificial, Natural, Synthetic)
5. WWW stands for _____.
(Wide world web, World wide web, Web world wide)
6. _____ is a non-living thing.
(Animals, Human beings, Sunlight)
7. _____ is the main source of water.
(Lake, Pond, Rain)
8. SMS stands for _____.
(short message service, small message service, stand message service)
9. A _____ family is a big family.
(joint , nuclear, single-parent)
10. Members of a family _____ each other.
(differ, resemble, dislike)

Q.3) Answer the following questions: -

[10x2=20]

1) Who are eskimos?

2) What are the materials used for a strong house?

3) What are domestic animals?

4) What is a nuclear family?

5) What is a family tree?

6) How do bullocks help farmers?

7) Why do we wear clothes?

8) Why do we need a house?

9) Name the three forms of water.

10) What is adoption?

Q.4) Answer the following questions:-

[8x5=40]

1) What are the similarities and differences between a letter and a phone call?

2)a) What is rainwater harvesting?

b) What is water conservation?

3) Name the events that cause changes in a family.

4) How can we save water in our daily life?

5) Why are some houses built on stilts?

6) What are the differences between kutcha houses and pucca houses?

Kutcha houses	Pucca houses

7) How should we take care of animals?





8) What are the differences between natural fibres and artificial fibres?

Natural fibres	Artificial fibres

ACTIVITY

(20 marks)


Q.1) Identify and write their names:



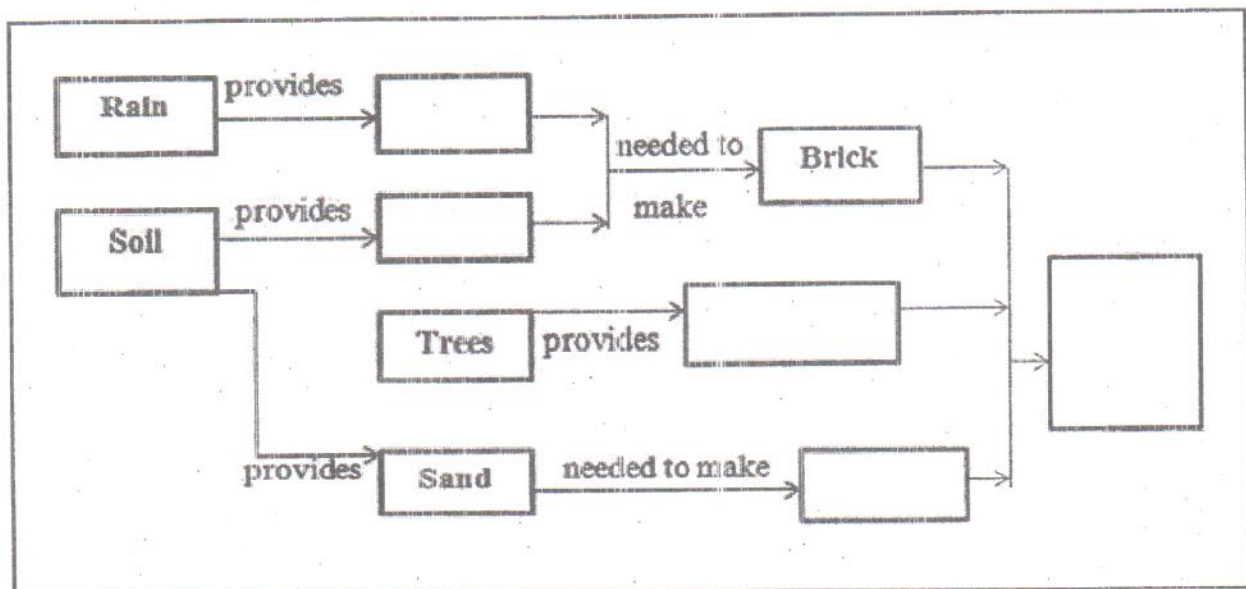
Q.2) Draw a family tree.

Q.3) This is a picture with Ruchira in the center. In this picture, draw-

1. A house behind Ruchira
2. An animal on Ruchira's right
3. A flower on Ruchira's left
4. A tree in front of Ruchira



Q.4) Form a web which shows the things which are required to make our house.



4. Cup : Coffee :: Tooth : _____.

a. Soap

b. Brush

c. Shampoo

5. Architect : Building :: Sculptor : _____.

a. Museum

b. Stone

c. Statue

6. Time : Clock :: Temperature : _____.

a. Celcius

b. Fever

c. Thermometer

7. Cup : Coffee :: Bowl : _____.

a. Dish

b. Soup

c. Glass

8. Charles Babbage : Computer :: Thomas Alva Edison : _____.

a. Radar

b. Bulb

c. Telephone

Q. 3. A tailor has 400m 26 cm of cloth. He used 248 m 8 cm for stitching shirts. How much cloth is left with him? [1]

a. 132 m 13 cm

b. 152 m 18 cm

c. 158 m 12 cm

Q. 4 The number of days between 21st November and 31st December are [1]

a. 41

b. 39

c. 42

Q.5 Geeta filled 8 glasses of 200 ml of juice. What is the total quantity of juice used by her? [1]

a. 1L 600ml

b. 16 l

c. 160 ml

Q.6 Find the missing number and complete the given series. [3 x 1 = 3]

i) 5, 10, 15, ?, 25, 30

a. 16

b. 18

c. 20

ii) 1000, 1500, 2000, ?, 3000

a. 2100

b. 2400

c. 2500

iii) 2, 4, 8, 16, ?

a. 32

b. 8

c. 9

Q.7 It is 8:00 pm right now. What time will be it be after 2 hours? [1]

a. 9:00 pm.

b. 10:00 pm

c. 11:00 pm

CHINMAYA VIDYALAYA TARAPUR

P-201, MIDC Indl.Area, Saravali, Boisar.

Evaluation - III - 2018 - 2019

Std: III Div: _____

Sub: Value Education

Marks: 25

Name: _____

Roll No.: _____

Q.1] Match the following:-

[5 X 1= 5]

- | | |
|-----------------------|---|
| 1. Our National flag | a. is very proud to belong to India. |
| 2. A patriotic Indian | b. to make medicines. |
| 3. Trees give us | c. the way people live, their arts, customs and traditions. |
| 4. Bark is used | d. is as important as our life. |
| 5. Culture is | e. oxygen to breathe. |

Q.2] Fill in the blanks:-

[5 X 1= 5]

1. We should _____ more trees.
2. India is also called _____.
3. We should not _____ water.
4. _____ loves every single being in the universe.
5. _____ is love for the country.

Q.3] Answer the following Questions:-

[5 X 3= 15]

Q.1) Write three ways in which you can save paper.

Q.2) List the various ways in which we can save water.

Q.3) Write the importance of various parts of trees.

CHINMAYA VIDYALAYA TARAPUR

P-201, M.I.D.C.Indl. Area, Saravali, Boisar

EVALUATION -III- 2018-19

Std:III

Sub: Information Technology

Marks - 40

Name : _____

Roll No - _____

Q1. Choose the correct answer from the given options and fill in the blanks:[5x 1=5]

- _____ function aligns the selected paragraph or text to the Centre.
a) Centre Align Text b) Left Align Text c) Right Align Text
- _____ command moves the turtle towards the right.
a) CT b) RT c) FD
- _____ stands for language of graphic oriented.
a) Logo b) Clear text c) ROM
- _____ tab is used to format text.
a) Home b) View c) Insert
- _____ key is used to delete a letter or word from right.
a) Delete b) Backspace c) Enter






Q.2. Fill in the blanks:

[5 x 1=5]

- A _____ is the most common computer application used to create, edit and print documents.
- _____ primitive moves the turtle forward.
- The cut option is present on the _____ menu.
- The _____ command erases the picture and brings the turtle back to the home position.
- _____ is a simple program used to draw figures.

Q.3 Write the name of each of the following button:-

[5X 1=5]

-  _____
-  _____
-  _____
-  _____
-  _____

2. What is Quick access Toolbar?

3. Write the steps to start the MSW logo program.

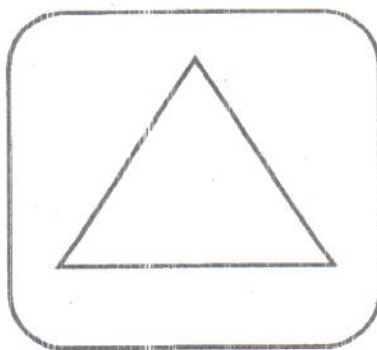
Q.6 Complete the following programs.

[5]

a) RT 30

RT 120
FD 100

FD 100



b) FD 60

FD 60 _____
FD 60

FD 60

