

Std: IV

Sub: Mathematics

M. Marks: 100

Name: \_\_\_\_\_

Roll No.: \_\_\_\_\_

Q.1 ] Fill in the blanks : [ 10 X 1 = 10 ]

- 1) The result obtained in multiplication is called \_\_\_\_\_ .
- 2)  $(3746 + 13801) + 63491 = 3746 + ( \text{_____} + 13801 )$
- 3) \_\_\_\_\_ is the only even prime number .
- 4)  $87300 \div 100 = \text{_____}$
- 5) A number that has more than two factors is called a \_\_\_\_\_ number.
- 6)  $80000 - 1 = \text{_____}$
- 7) The distance between the centre of a circle and a point on the circle is called \_\_\_\_\_ of the circle .
- 8)  $3000 \times 40 = \text{_____}$
- 9) A number is divisible by \_\_\_\_\_ if the number formed by its last two digits is also divisible by 4 .
- 10) A \_\_\_\_\_ has only one end point .

Q.2] Choose the correct answer and fill in the blanks : [ 10 X 1 = 10 ]

- 1) A \_\_\_\_\_ is a number that is a product of two given numbers.

[ multiple          factor          LCM ]

- 2) 36,000 less than 56,555 is \_\_\_\_\_ .

[ 20,000          20,500          20,555 ]

- 3)  $\frac{3}{6}$  of 36 = \_\_\_\_\_ [ 6          3          18 ]

- 4) 348 is divisible by \_\_\_\_\_ . [ 3          5          10 ]

- 5) \_\_\_\_\_ is the smallest odd composite number .

[ 7          9          11 ]

- 6) \_\_\_\_\_ is the longest chord . [ Radius          Diameter          Arc ]

- 7) The eighth multiple of 15 is \_\_\_\_\_ .

[ 120          60          90 ]

- 8) If a number is divided by \_\_\_\_\_ the quotient is the number itself .

[ 1          0          same number ]

- 9) 2895 is \_\_\_\_\_ more than 2800 .

[ 85          95          90 ]

- 10) \_\_\_\_\_ = Diameter  $\div$  2 [ Radius          Diameter          Arc ]

Q.3] Solve.

[ 10 X 2 = 20 ]

1)  $56 \div 7 + 2 \times 5 - 3$

---

---

---

2) Write all the prime numbers between 35 and 50.

---

3) Make a factor tree of 48 .

---

---

---

---

---

4) Write two equivalent fractions for  $\frac{7}{5}$

---

---

---

5) Study the given number sentences .

  $\times$   = 27

  $\div$   = 3

Find the value of  and 

---

---

---

6) Find the diameter of a circle with radius 4 cm .

---

---

---

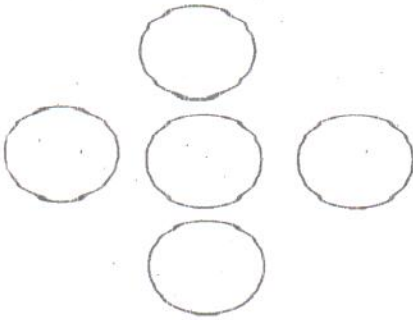
7) Convert  $\frac{11}{9}$  into mixed fraction .

---

---

---

8) Place the digits 1, 2, 3, 4 and 5 in these circles so that the sums horizontally and vertically will be the same.



9) The difference between two numbers is 3459. What might the numbers be?

---

---

---

10) Fill in the missing digits:

$$\begin{array}{r} 3 \quad \square \quad 7 \quad \square \quad 6 \\ + 2 \quad 6 \quad \square \quad 5 \quad 1 \\ \hline 5 \quad 8 \quad 7 \quad 9 \quad \square \end{array}$$

Q. 4 ] Solve.

[ 8 X 5 = 40 ]

1] The cost of one pen is Rs. 18. How many pens can be bought for Rs 648.

---

---

---

---

---

---

---

2] Ram and Raghu wrote 2 digit numbers, each having the digit 7 only one time and in the place shown

Ram - \_\_\_\_\_ 7

Raghu - 7 \_\_\_\_\_

Ram wrote the greatest 2 digit number and Raghu wrote the least 2 digit number. What is their product?

---

---

---

---

---

---

---

3] Find the LCM of 5 and 10 by common multiple method .

4) Maya read  $\frac{64}{10}$  pages of a book and Rama read  $\frac{56}{10}$  pages . How many pages were read by both of them ?

5] Find the HCF of 16 and 64 by prime factorization method.

6] There are 45,753 trees in an orchard . 12,839 trees fell down in a storm . How many trees are left in the orchard ?

7] There are 23,465 red roses , 46,037 white roses and 35,128 pink roses in a garden .  
What is the total number of roses in the garden ?

---

---

---

---

---

---

---

---

---

---

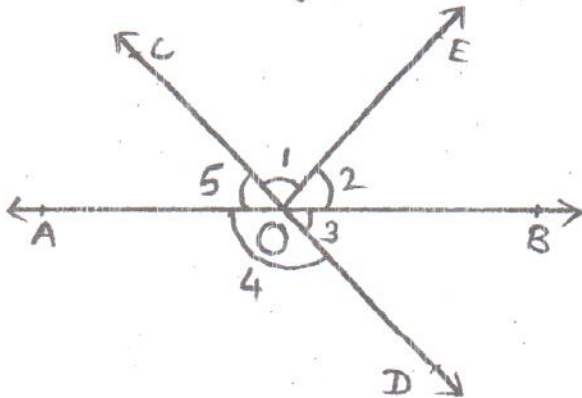
8] Write the multiplication table of 22.

|  |  |
|--|--|
|  |  |
|  |  |
|  |  |
|  |  |
|  |  |
|  |  |
|  |  |
|  |  |
|  |  |
|  |  |

ACTIVITY (20 Marks)

1] Name each of the angles in the adjoining figure.

[ 5 ]



- a) /1 - \_\_\_\_\_
- b) /2 - \_\_\_\_\_
- c) /3 - \_\_\_\_\_
- d) /4 - \_\_\_\_\_
- e) /5 - \_\_\_\_\_

2] Draw a circle with radius 4 cm and mark centre , radius , diameter and chord: [5]

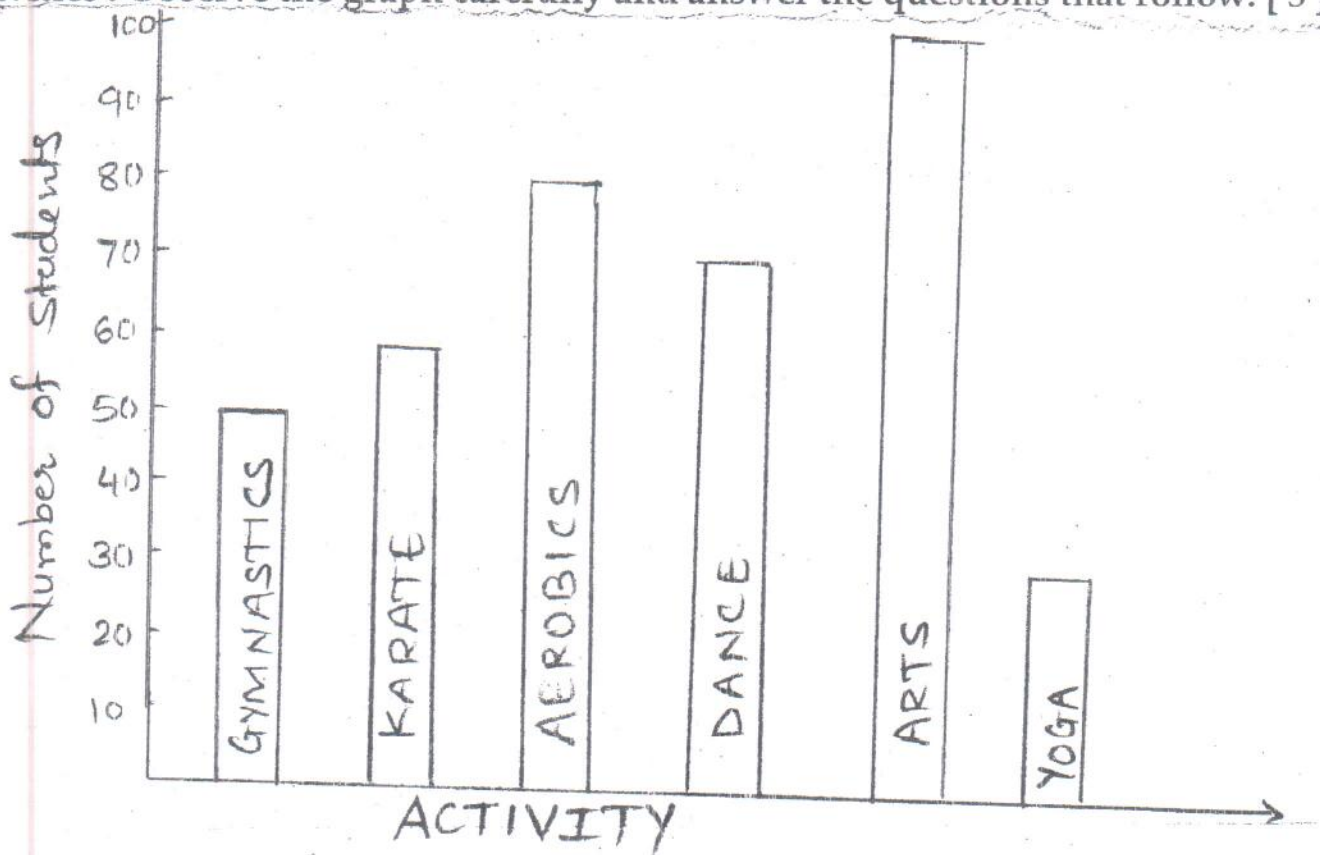
3) Construct, name and classify the following angles :

[ 5 ]

a)  $75^\circ$

b)  $130^\circ$

4) The following graph depicts the number of students who opted for various activities . Observe the graph carefully and answer the questions that follow. [ 5 ]



1) Which is the most popular activity among students ?

2) How many students are there in all ?

3) Which is the least popular activity among students ?

4) How many students opted for Dance ?

5) How many more students opted for Aerobics than Yoga ?



Q3. Write an email to your friend, Raj inviting him to spend the summer vacation with you. (5)

Q4. Fill in the blanks with correct tense form of the verbs given in the brackets: (5)

1. The Earth \_\_\_\_\_ (move) around the sun.
2. Manu \_\_\_\_\_ (look) for his pen now.
3. The crowd \_\_\_\_\_ (cheer) when they had seen their favourite star.
4. This author \_\_\_\_\_ (write) ghost stories.
5. They \_\_\_\_\_ (act) in the play tomorrow.

Q5. Identify and write the kind of sentences: (2)

1. Have you seen Souvik today? \_\_\_\_\_
2. He went to the doctor. \_\_\_\_\_

Q6. Change the gender of the underlined nouns and rewrite the sentences: (2)

1. The duck swam in the pond and the hen walked around the farm.

2. The witch cast a spell on the cruel king and turned him into a bear.



Q7. Fill in the blanks with suitable articles:

(2)

1. She gave me \_\_\_\_\_ idea for my project.
2. It was \_\_\_\_\_ useful gift.

Q8. Fill in the blanks with the correct degree of adjectives given in the bracket:

(3)

1. This was the \_\_\_\_\_ (difficult) question of all.
2. He is a \_\_\_\_\_ (bad) player than me.
3. Sunita is a \_\_\_\_\_ (good) driver.

Q9. Fill in the blanks with suitable pronouns:

(2)

1. My mother loves to cook. \_\_\_\_\_ is known for her delicious muffins.
2. These are my friends. I met \_\_\_\_\_ in Nainital.

Q10. Fill in the blanks with suitable conjunctions from the bracket:

(4)

1. Hari \_\_\_\_\_ Ram came looking for me. (and/or)
2. \_\_\_\_\_ you work hard, you will succeed. (but/if)
3. Minu sent me an urgent mail \_\_\_\_\_ I was away. (till/while)
4. She was not a close friend \_\_\_\_\_ she helped me when I needed it. (or/but)

Q11. Underline the adverbs in the given sentences and state their kind:

(4)

1. The cat slept soundly. \_\_\_\_\_
2. I could not find my pen anywhere. \_\_\_\_\_
3. She hurt herself yesterday. \_\_\_\_\_
4. I asked the boys to come inside. \_\_\_\_\_

Q12. Fill in the blanks with suitable prepositions:

(4)

1. I have to finish this work \_\_\_\_\_ tomorrow. (on/by)
2. Ramesh walked \_\_\_\_\_ the room. (at/into)
3. He is known \_\_\_\_\_ his honesty. (for/from)
4. He is very different \_\_\_\_\_ his brother. (by/from)

Q13. Punctuate and rewrite the given sentences:

(2)

1. will you help me with my homework

2. I had peas tomatoes rice and pancakes for lunch.

Q14. Correct the incorrect sentences:

(5)

1. There is a large crowd outside the mall last evening.

2. Uday is oldest than his sister.

3. She have a pet dog.

4. The ball rolled in the table.

5. This house is small or comfortable.

Q15. Translate the following sentences into English.

(5)

1 पापा मेरे लिए गुड़िया लाएँगे |

2 दादा जी कल मंदिर जाएँगे |

3 मेरी बहन दसवीं कक्षा में पढ़ती है |

4 कल हम चिड़ियाघर गए थे |

5 रोहन मेरा सबसे अच्छा दोस्त है |

Q16. Write one word for the following words: -

(3)

1. a raised path at the side of a road --

2. to tell somebody something confidently--

3. the feeling of no hope--

Q17. Write the meanings of the following words:

(3)

1. echo-

2. heartbroken-

3. roam-

Q18. Make sentences by using the following words:

(4)

1. grief -

2. pleaded-

3. vanished-

4. weave-

Q19. Answer the following questions:

1. Why do you think the boy gives a manly whistle?

(1)

2. Who wove the clouds for the sky?

(1)

3. What happened when a prince rode by?

(2)

4. Why were there no more clouds?

(3)

5. Under what condition did the man give the beggar the coins? (3)

\_\_\_\_\_

\_\_\_\_\_

6. What happened when the beggar tried to pick up the coins? (2)

\_\_\_\_\_

\_\_\_\_\_

7. Why did the beggar lose everything? (1)

\_\_\_\_\_

8. What does the poet of the poem, 'The Pedlar's Caravan' want to do? (2)

\_\_\_\_\_

Q20. Complete the lines of the poem. (5)

He has a wife with a baby brown,

\_\_\_\_\_

\_\_\_\_\_

\_\_\_\_\_

Just like the 'Travels of Captain Cook'.

Activity


(10)

Find out the adverbs from the grid and write in the blanks:

|   |   |   |   |   |   |   |   |   |   |
|---|---|---|---|---|---|---|---|---|---|
| G | S | O | M | E | W | H | E | R | E |
| R | L | O | E | N | G | S | O | A | A |
| E | O | U | E | B | A | N | N | R | I |
| A | L | W | A | Y | S | E | C | E | N |
| G | E | G | E | N | G | V | E | L | S |
| O | R | E | S | R | G | E | S | Y | I |
| R | T | F | A | S | T | R | E | Z | D |
| Q | U | I | C | K | L | Y | I | E | E |
| W | F | A | W | A | Y | E | R | C | D |
| S | I | L | E | N | T | L | Y | N | M |

1. \_\_\_\_\_
3. \_\_\_\_\_
5. \_\_\_\_\_
7. \_\_\_\_\_
9. \_\_\_\_\_

2. \_\_\_\_\_
4. \_\_\_\_\_
6. \_\_\_\_\_
8. \_\_\_\_\_
10. \_\_\_\_\_



चिन्मय विद्यालय तारापूर.

एम. आय. डी. सी. एरिया सरावली, बोईसर.

इयत्ता ४ \_\_\_\_\_

मुल्यांकन - ३ - २०१८- २०१९.

गुण ५०

विषय मराठी.

नाव \_\_\_\_\_

अनुक्रमांक

प्रश्न १) खालील शब्दांचे मराठीत अर्थ लिहा. (मजा, मित्र, पाऊस, वारा, बाजार) (५)

१) fun - \_\_\_\_\_ २) friend - \_\_\_\_\_ ३) market - \_\_\_\_\_

४) wind - \_\_\_\_\_ ५) rain - \_\_\_\_\_

प्रश्न २) वचन बदला. (घरे, जंगल, दार, देऊळ, दिवे) (५)

१) देवळे - \_\_\_\_\_ २) दार - \_\_\_\_\_ ३) दिवा - \_\_\_\_\_

४) जंगल - \_\_\_\_\_ ५) घर - \_\_\_\_\_

प्रश्न ३) विरुद्धार्थी शब्द लिहा. (सोपे, पुण्य, प्रसन्न, नुकसान, तरुण) (५)

१) पाप - \_\_\_\_\_ २) कठीण - \_\_\_\_\_

३) म्हातारा - \_\_\_\_\_ ४) उदास - \_\_\_\_\_ ५) फायदा - \_\_\_\_\_

प्रश्न ४) लिंग बदला. (पुत्री, सावकारीण, ती, मालकीण, आई) (५)

१. मालक \_\_\_\_\_ २. पुत्र \_\_\_\_\_

२. सावकार \_\_\_\_\_ ४) तो \_\_\_\_\_ ५) वडील \_\_\_\_\_

प्रश्न ५) रिक्तस्थानात जागी कंसातील योग्य क्रियापद लिहा. (आला, गेली, पसरली, आले, घेतली) (५)

१) मीना बाजारात \_\_\_\_\_ .

२) ही वार्ता गावभर \_\_\_\_\_ .

३) रामभाऊ सराफाच्या दुकानी \_\_\_\_\_ .

४) रामभाऊंनी रुपया व पिशवी \_\_\_\_\_ .

५) त्यांच्या मनात एक विचार \_\_\_\_\_ .

प्रश्न ६) कवितेच्या ओळी पूर्ण करा . (५)

१) \_\_\_\_\_ गादी निजावयाला . ( कडक, नवी, मऊ)

२) \_\_\_\_\_ कुणी सांगेल न मजला . ( तक्रार, काम, दाम)

१. बसेल सांगत \_\_\_\_\_ आजी . ( गोष्टी, गाणी, गप्पा)

२. जा \_\_\_\_\_ मौज हिच वाटे भारी . ( घरी, दारी, बाजारी)

३. नकोच जाणे मग \_\_\_\_\_ . ( शाळेला, घरी , खेळाया)

प्रश्न ७) चिकान्या जागी कंसातील योग्य शब्द लिहा ( मोल ,आनंदी, बी, आळशी, मंडईतून, ) (५)

१) ती फारच ————— होती .

२) खूप कष्ट करून ————— पेरले .

३) रामभाऊंना पैशाचे ————— कळून आले .

४) त्यांनी ————— भाजी खरेदी केली .

५) दोन्ही मुले ————— झाली .

प्रश्न ८) प्रश्नांची उत्तरे लिहा .

( १० )

१) मुलाला काय खायला मिळणार आहे?

२) गवताला कोण गोंजारत आहे ? .

३) मुलांना कशाची आठवण आली ?

४) कष्टाचे फळ कसे असते ?

५) शेतात काय दिसू लागले?

प्रश्न ९) तुमचा 'आवडता सण' या विषयावर वाक्यरचना लिहा. (५)

चिन्मय विद्यालय, तारापुर  
एम. आर्. डी. सी. एरिया सरावली  
मूल्यांकन ३ (२०१८-१९)

कक्षा - चौथी

पूर्णांक १००

विषय - हिंदी

नाम : \_\_\_\_\_

अनुक्रमांक

प्र.१) निम्नलिखित शब्दों में से उचित शब्द चुनकर लिखिए |

१०

[टाँग, नारियल, छड़ी, चुपड़ी, अजीबोगरीब, कोलाहल, मेहनत, साग- सब्जी, फ़रीदा, नहा - धोकर]

१) आठ बजे तक सुनीता \_\_\_\_\_ तैयार हो गई |

२) देख चुन्नु, तू और टिंकू बाज़ार से \_\_\_\_\_ लाने का काम करना |

३) मेरी \_\_\_\_\_ बेकार हो गई |

४) लोग मेरे साथ ऐसा व्यवहार करते हैं जैसे कि मैं कोई \_\_\_\_\_ लड़की हूँ |

५) हाँ खाऊँगी सौ - सौ बार, जो सोओगे \_\_\_\_\_ पसार |

६) जूते पहनकर, \_\_\_\_\_ उठाकर, भीखूभाई निकल पड़े |

७) सड़क पार करते समय सुनीता को \_\_\_\_\_ फिर नज़र आई |

८) रोटी कैसी गरम - गरम है, घी से \_\_\_\_\_ नरम - नरम है |

९) मंडी में \_\_\_\_\_ फैला हुआ था |

१०) घर में तो एक भी \_\_\_\_\_ नहीं था |

प्र.२) कविता की पंक्तियाँ पूरी कीजिए |

५

\_\_\_\_\_ का यह \_\_\_\_\_ तुम्हारा चलता या \_\_\_\_\_ है ?

रहता है \_\_\_\_\_, खड़ा हो या \_\_\_\_\_ करता है ?

प्र.३) निम्नलिखित पठित गद्यांश को पढ़कर दिए गए प्रश्नों के उत्तर लिखिए |

सुनीता ने माँ से झोला और रुपए लिए | अपनी पहिया कुर्सी पर बैठकर वह बाज़ार की ओर चल दी | सुनीता को सड़क की जिंदगी देखने में मज़ा आता है | चूँकि आज छुट्टी है इसलिए हर जगह बच्चे खेलते हुए दिखाई दे रहे हैं | सुनीता थोड़ी देर रुक कर उन्हें रस्सी कूदते, गेंद खेलते देखती रही | वह थोड़ी उदास हो गई | वह भी उन बच्चों के साथ खेलना चाहती थी | खेल के मैदान में उसे एक लड़की दिखी, जिसकी माँ उसे वापिस लेने के लिए आई थी | दोनों एक - दूसरे को टुकुर - टुकुर देखने लगे |

१) सुनीता किसके साथ खेलना चाहती थी ?

२

२) सुनीता किस पर बैठकर बाज़ार चली गई ?

२

३) सुनीता को क्या देखने में मज़ा आता है ?

१

प्र.४) क) निम्नलिखित प्रश्नों के उत्तर लिखिए |

१०

१) सुनीता के लिए कौन - से काम कठिन थे ?

२) चुनू और टिंकू ने क्या पकाने का प्रयास किया था ?

३) भीखू भाई को पचास पैसे में नारियल कहाँ मिला ?

४) सरला ने खेल में क्या बनाया ?

ख) निम्नलिखित वाक्य किसने, किससे कहा ?

३

१) " मैं ? मैं तेरे संग रोटि बनाऊँगी ।"

२) " क्या मैं तुम्हारी कुछ मदद करूँ ?"

३) " हाँ | पैसे तो खर्च करने पड़ेंगे ।"

ग) निम्नलिखित शब्दों का वाक्य में प्रयोग कीजिए ।

२

१) मेहनत -

२) आलसी -

घ) निम्नलिखित गिनती को अंकों व अक्षरों में लिखिए ।

५

७५ -

छियासी -

९२ -

अस्सी -

१०० -

प्र.५) क) निम्नलिखित अशुद्ध शब्दों के शुद्ध रूप लिखिए ।

४

१) दुध

२) मीठाई

३) अकाश

४) मां

ख) निम्नलिखित शब्दों के सही पर्यायवाची शब्द चुनकर लिखिए । [ पहाड़, निशा, तटिनी ]

३

१) रात -

२) नदी -

३) अचल -

ग) निम्नलिखित शब्दों के सही विलोम शब्द चुनकर लिखिए । [ राजा, दूर, अस्त ]

३

१) उदय -

२) रंक -

३) पास -

घ) निम्नलिखित अनेक शब्दों के लिए एक शब्द लिखिए । [ भाग्यशाली, कामचोर, मूक, सहपाठी ]

४

१) काम से जी चुराने वाला -

२) जिसका भाग्य अच्छा हो

३) जो बोल न सके -

४) साथ पढ़ने वाला -

ङ) निम्नलिखित मुहावरों के अर्थ लिखिए ।

२

१) नौ - दो ग्यारह होना --

२) नानी याद आना --

च) निम्नलिखित वाक्यों में से क्रियापद छाँटकर लिखिए ।

३

१) सुमित तैर रहा है ।

२) आम मीठा है ।

३) पेड़ से पत्ते गिर रहे हैं ।



छ) निम्नलिखित कालों का प्रयोग करते हुए खाली स्थान भरिए | [ गई, रहे हैं, जाएगा ]

१) बच्चे सो \_\_\_\_\_ |

२) कल विद्यालय में वार्षिक महोत्सव मनाया \_\_\_\_\_ |

३) हमें सही समय पर बस मिल \_\_\_\_\_ |

ज) रिक्त स्थानों में उचित विशेषण शब्द भरिए |

१) \_\_\_\_\_ बोली सबको अच्छी लगती है | ( कड़वी / मीठी )

२) मैंने \_\_\_\_\_ कुल्फी खाई | ( गरम / ठंडी )

३) माँ ने \_\_\_\_\_ खाना बनाया | ( काला / स्वादिष्ट )

झ) निम्नलिखित वाक्यों को शुद्ध करके फिर से लिखिए |

१) दादी जी सुनाई ने बच्चों को कहानी | \_\_\_\_\_

२) राहुल ने चित्र बनाई | \_\_\_\_\_

३) तुम जाओ बाज़ार चले | \_\_\_\_\_

४) नेहा पानी में तैरना जानता है | \_\_\_\_\_

५) अध्यापक पाठ समझा रही हैं | \_\_\_\_\_

प्र.६) निम्नलिखित अपठित गद्यांश को पढ़कर दिए गए प्रश्नों के उत्तर लिखिए |

१०

अकबर और बीरबल के किसे बहुत प्रसिद्ध हैं | अकबर एक महान शासक थे | बीरबल उनके नवरत्नों में से एक थे | एक बार अकबर, बीरबल के साथ अपने घोड़े पर बैठकर बगीचे की सैर कर रहे थे | चारों तरफ हरियाली को देखकर उनका मन प्रसन्न हो गया | बादशाह अकबर ने सोचा कि यदि मेरे पास हरे रंग का घोड़ा होता तो मैं उस पर बैठकर हरे-भरे स्थानों की सैर करता | बस फिर क्या था ? बादशाह अकबर ने बीरबल से कहा - " मैं तुम्हें एक सप्ताह का समय देता हूँ कि तुम मेरे लिए हरे रंग के घोड़े का प्रबंध करो | " बादशाह अकबर बीरबल की बुद्धिमानी की परीक्षा लेना चाहते थे इसलिए उन्होंने हरे रंग का घोड़ा लाने के लिए कहा था |

प्र.क) अकबर का मन क्यों प्रसन्न हो गया ?

प्र.ख) अकबर ने बीरबल को कितने दिनों का समय दिया ?

प्र.ग) अकबर ने बीरबल को किसका प्रबंध करने के लिए कहा था ?

प्र.घ) किसे किसके बहुत प्रसिद्ध है ?

प्र.ङ) बादशाह ने बीरबल को हरे रंग का घोड़ा क्यों लाने के लिए कहा था ?

प्र.७) निम्नलिखित विषय पर अनुच्छेद लिखिए | " पुस्तकालय "

५

प्र.८) निम्नलिखित संज्ञा शब्दों से बने विशेषण शब्दों को वर्गपहेली से ढूँढ़ कर लिखिए |


१०

|    |      |    |   |     |   |    |    |    |
|----|------|----|---|-----|---|----|----|----|
| भा | र    | ती | य | सां | ष | दै | प  | दो |
| घ  | ध    | ह  | फ | सा  | य | नि | ह  | षी |
| न  | न    | ड  | ग | रि  | छ | क  | ल  | ढ  |
| म  | वा   | छ  | च | क   | च | म  | की | ला |
| फि | न    | द  | अ | द   | ब | से | श  | रं |
| न  | म    | की | न | या  | ध | व  | ठ  | गी |
| वै | ज्ञा | नि | क | लु  | र | क  | म  | न  |

|       |       |
|-------|-------|
| संसार | _____ |
| भारत  | _____ |
| दोष   | _____ |
| दिन   | _____ |
| नमक   | _____ |
| रंग   | _____ |
| धन    | _____ |
| सेवा  | _____ |
| चमक   | _____ |
| दया   | _____ |

प्र.९) अपने विद्यालय में मनाए गए वार्षिक महोत्सव के बारे में वर्णन करते हुए चाचा जी को पत्र लिखिए | ५

A series of horizontal lines for writing the answer.



CHINMAYA VIDYALAYA TARAPUR  
P-201, MIDC.Indl.Area, Saravali, Boisar.  
Evaluation - III (2018-2019)

Std: IV \_\_\_\_\_

Sub:-G.K.

Max. Marks: 50

Name: \_\_\_\_\_

Roll No: \_\_\_\_\_

I] Fill in the blanks:

[1x10=10]

1. \_\_\_\_\_ was the first man to be photographed on the Mount Everest.
2. \_\_\_\_\_ means 'The Enlightened One'.
3. \_\_\_\_\_ was the first European to reach Hawaii and New Zealand.
4. \_\_\_\_\_ acted as the mother of the actor Sunil Dutt in the movie 'Mother India'.
5. Sebastian Vettel is a sportsman playing the sport, \_\_\_\_\_.
6. \_\_\_\_\_ is a sport played in water and consists of relays and speed races.
7. \_\_\_\_\_ was an Italian explorer, known for his discovery of America.
8. \_\_\_\_\_ was the founder of Jainism.
9. The currency of Italy is \_\_\_\_\_.
10. \_\_\_\_\_ are considered good luck symbols in China.

II] Fill in the blanks with the correct word from the bracket: [1x10=10]

1. The capital of Switzerland is \_\_\_\_\_. (Cairo, Bern, Berlin)
2. \_\_\_\_\_ is the tallest waterfall in the world. (Victoria Falls, Angel Falls, Joy Falls)
3. The country, \_\_\_\_\_ is shaped like a boot. (Germany, Spain, Italy)
4. In 2002, \_\_\_\_\_ was honoured with the Dadasaheb Phalke Award. (Lata Mangeshkar, Dev Anand, Amitabh Bachchan)
5. Ranji Trophy is awarded for the sport, \_\_\_\_\_. (badminton, cricket, football)
6. The 2010 Commonwealth Games were held in \_\_\_\_\_. (United Kingdom, Japan, India)
7. The first modern Olympic Games were held in Athens, Greece in \_\_\_\_\_. (1876, 1886, 1896)
8. The 2012 Summer Olympic Games were held in \_\_\_\_\_. (New Delhi, London, Berlin)
9. The country, \_\_\_\_\_ is known as the 'God's Own Country'. (Japan, France, New Zealand)
10. \_\_\_\_\_ is the largest lake in the world. (Caspian Sea, Dead Sea, Black Sea)

III] Answer the following questions in one word or a sentence: [1x10=10]

1. Which is the smallest country in the world?

2. Where do Parsis go to worship?

3. Which is the longest river in the world?

4. What do the five coloured rings joined together, on the flag of the Olympic Games represent?

5. Which sport uses a course, balls and a club?

6. In which religion is the Dalai Lama an important figure?

(std-4-GK-2)

7. Which city is nicknamed 'The Big Apple'?

8. What is our national tree?

9. Which Telugu film actor served twice as the Chief Minister of Andhra Pradesh?

10. Which Sikh Guru gave Sikh men the last name 'Singh'?

**IV] Write the name of the festivals for the given descriptions: [1x5=5]**

1. Parsi New Year- \_\_\_\_\_

2. Kite-flying festival of Gujarat- \_\_\_\_\_

3. Birthday of the founder of Sikhism- \_\_\_\_\_

4. The day Lord Rama defeated Ravana- \_\_\_\_\_

5. Gautam Buddha's birthday- \_\_\_\_\_

**V] Complete the table:**

[1x15=15]

| State          | Dance forms |
|----------------|-------------|
| Tamil Nadu     |             |
| Uttar Pradesh  |             |
|                | Kathakali   |
|                | Manipuri    |
| Kashmir        |             |
| Andhra Pradesh |             |
| Odisha         |             |
|                | Gidda       |
|                | Garba       |
| West Bengal    |             |
|                | Lavani      |
| Punjab         |             |
|                | Bihu        |
| Rajasthan      |             |
| Kerala         |             |

CHINMAYA VIDYALAYA TARAPUR  
P-201 MIDC Industrial Area, Saravali, Boisar  
Evaluation-III (2018-2019)

Sub-EVS

Marks:100

STD-IV DIV : \_\_\_\_\_

Roll No : \_\_\_\_\_

Name : \_\_\_\_\_

(10X1=10)

Q.1) Fill in the blanks:

1. The two different types of roots are \_\_\_\_\_ and \_\_\_\_\_.
2. \_\_\_\_\_ is a common variety of rice.
3. \_\_\_\_\_ is a unique prayer of Sikh religion.
4. The first day of Bihu is called \_\_\_\_\_.
5. Pochampalli town is situated in \_\_\_\_\_.
6. The common fruit grown in Abu Dhabi is \_\_\_\_\_.
7. \_\_\_\_\_ seeds keep our stomach healthy.
8. \_\_\_\_\_ commands have to be given during the entire parade.
9. A person who cannot walk is \_\_\_\_\_.
10. \_\_\_\_\_ is an inclined surface or roadways connecting different levels.

Q.2) Choose the correct option and fill in the blanks:

(10X1=10)

1. The leaves of plants get water from the \_\_\_\_\_  
a) soil      b) air      c) sun.
2. BhelaGhar is a temporary shed made of \_\_\_\_\_  
a) wood and steel      b) grass and bamboo      c) glass.
3. Golden Temple is a famous \_\_\_\_\_  
a) Church      b) Mosque      c) Gurudwara.
4. The capital of United Arab Emirates is \_\_\_\_\_  
a) Singapore      b) Abu Dhabi      c) Malaysia.
5. The thread which is used to weave clothes to wear in summer is \_\_\_\_\_  
a) Silk      b) Cotton      c) wool.
6. The Name of the currency in UAE is \_\_\_\_\_  
a) Rupees      b) Dirham      c) Dollar
7. \_\_\_\_\_ is used to make the food yellow in colour.  
a) Red chilli      b) Turmeric      c) Black pepper.
8. A prism is a kind of glass that reflects \_\_\_\_\_ colours.  
a) Seven      b) eight      c) nine
9. National day of Abu Dhabi is celebrated on \_\_\_\_\_  
a) 2<sup>nd</sup> December      b) 6<sup>th</sup> December      c) 25<sup>th</sup> December

10. The chief of the Army staff is \_\_\_\_\_

- a) General Bipin Rawat   b) Admiral Sunil Lanba   c) Birender Singh Dhanoo

Q.3) Answer the following questions in short :

(10X2=20)

1. Write any two functions of a root.

---

---

---

---

---

---

---

---

2. What is community eating?

---

---

---

---

---

---

---

---

3. What is the traditional dress of women in Assam?

---

---

---

---

---

---

---

---

4. What is Kadhah Prasad?

---

---

---

---

---

---

---

---

5. How is pochampalli cloth get its name?

---

---

---

---

---

---

---

---

6. How do the weavers decide the size of the needle?

---

---

---

---

---

---

---

---

7. What are sand dunes?

---

---

---

---

---

---

---

---

8. Why do you think many trees cannot grow in desert areas?

---

---

---

---

---

---

---

---

9. Who is Wahida Prism?

---

---

---

---

---

---

---

---



10. Where is Ladakh? What kind of a place it is?

**Q.4) Long answer questions:**

(8X5=40)

1. Explain the difference between Taproot and Fibrous root with the help of examples.

2. What is Bihu festival and where is it celebrated?

3. a) what are the benefits of mid-day meal scheme?

b) Name two food items children get in mid-day meal

4. a) Why is weaving craft in danger?

b) Name any two traditional Occupations.

5. Write the steps involved in making saree from threads.

6. Why do people travel to different places?

7. Write the full form of the following :-

- a) MBBS: \_\_\_\_\_
- b) NDA: \_\_\_\_\_
- c) NSS: \_\_\_\_\_
- d) NCC: \_\_\_\_\_
- e) RSS: \_\_\_\_\_

8. Write about a wheel chair.

---

---

---

---

---

---

---

---

---

---

Q.5) Activity:


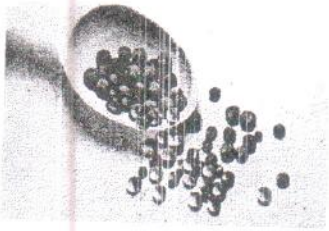
(4x5=20)

1. Draw a plant and label its parts.

2. Comparison of Abu Dhabi and Kerala.

| Points of comparison     | Abu Dhabi | Kerala |
|--------------------------|-----------|--------|
| The Climate And Weather. |           |        |
| The trees and plants     |           |        |
| The common food items    |           |        |
| The Language             |           |        |
| The capital              |           |        |

3. Identify the spices and write their names.



4. Observe the given pictures and name them.



CHINMAYA VIDYALAYA TARAPUR  
P-201, MIDC.Indl.Area, Saravali, Boisar.  
Evaluation - III (2018-2019)

Std: IV \_\_\_\_\_

Sub:-L.R.

Max. Marks: 25

Name: \_\_\_\_\_

Roll No: \_\_\_\_\_

**Q. Tick the correct option:**

1. I am greater than 20 and less than 26. I am even and when you double 11 you will NOT get me. What number am I?

- a] 24                      b] 22                      c] 18                      d] 26

2. A,P,R,X,S and Z are sitting in a row. S and Z are in the centre. A and P are at the ends. R is sitting to the left of A. Who is to the right of P?

- a] Z                      b] R                      c] A                      d] X

3. Look at the series: 3,9,27,81, \_\_\_\_\_. What number should come next?

- a] 243                      b] 162                      c] 324                      d] 216

4. Find the missing number:

40462, 42462, 44462, \_\_\_\_\_, 48462, 50462

- a] 43462                      b] 46462                      c] 47462                      d] 49462

5. Choose the correct option:

\_\_\_\_\_ : trail :: grain : grail

- a] troop                      b] grill                      c] train                      d] track

6. Choose the correct option:

\_\_\_\_\_ : horse :: board : train

- a] ride                      b] climb                      c] pull                      d] mount

7. 80 : 40 :: 2 : \_\_\_\_\_

- a] 4                      b] 6                      c] 3                      d] 1

8. Find the odd one out: roof, leaves, stem, plant

- a] roof                      b] leaves                      c] stem                      d] plant

9. Find the odd one out: book, pencil, paper, maths

- a] book                      b] pencil                      c] paper                      d] maths

10. Fill in the blank: 7, 10, 8, 11, 9, 12, \_\_\_\_\_, \_\_\_\_\_

- a] 6, 12                      b] 7, 11                      c] 8, 10                      d] 10, 13

11. Fill in the blank: 36, 34, 30, 28, 24, ?

- a] 22                      b] 20]                      c] 21                      d] 19

12. 201, 202, 204, 208, \_\_\_\_\_

- a] 209                      b] 210                      c] 211                      d] 216

13. The pages of a book are numbered 1 to 100 manually. How many times numeral 5 is written?

- a) 16                      b) 17                      c) 18                      d) 20

14. Rohan remembers that he had visited Pagoda between 21<sup>st</sup> and 24<sup>th</sup> December last year. His father remembers that the date Rohan had visited was an odd number. On which date had Rohan visited Pagoda?

- a) 21<sup>st</sup>                      b) 22                      c) 23                      d) 24

15. Anshika introduces a man as the son of the brother of her mother. How is the man related to Anshika?

- a) uncle                      b) brother                      c) cousin                      d) father

16. Find the odd one out: mango, papaya, apple, orange

- a) mango                      b) papaya                      c) apple                      d) orange

17. Pointing to a man in a photo, a woman said, "His brother's father is the only son of my grandfather." How is the woman related to the man in the photograph?

- a) wife                      b) mother                      c) sister                      d) daughter

18. elbow : arm :: knee : \_\_\_\_\_

- a) hand                      b) leg                      c) foot                      d) thigh

19. boy : child :: man : \_\_\_\_\_

- a) adult                      b) girl                      c) woman                      d) boy

20. Complete the series: AZ, GT, MN, \_\_\_\_\_, YB

- a) CD                      b) OS                      c) IP                      d) SH

21. Complete the series: AZ, BY, CX, \_\_\_\_\_

- a) DS                      b) DP                      c) DT                      d) DW

22. How many months lie between fourth and seventh month of a year?

- a) 3                      b) 2                      c) 5                      d) 1

23. coffee : cup :: soup : \_\_\_\_\_

- a) glass                      b) fork                      c) plate                      d) bowl

24. Fill in the blanks: A, B, N, C, D, O, E, F, P, \_\_\_\_\_, \_\_\_\_\_, \_\_\_\_\_

- a) R,S,U                      b) G,H,Q                      c) I,J,P                      d) S,T,Z

25. Look at the series: 20, 15, 20, 17, 20, \_\_\_\_\_. What number should come next?

- a) 19                      b) 21]                      c) 22                      d) 23

CHINMAYA VIDYALAYA TARAPUR  
P-201, MIDC.Indl.Area, Saravali, Boisar.

Evaluation - III (2018-2019)

Sub:-Value Education

Marks: 25

Std: IV \_\_\_\_\_

Name: \_\_\_\_\_

Roll No: \_\_\_\_\_

Q. 1 Fill in the blanks:

[ 5 X 2 = 10 ]

1. Human beings are the highest creation of \_\_\_\_\_ .
2. The more you love the poor, the more \_\_\_\_\_ you will have.
3. In the Ramayana, the demon king \_\_\_\_\_, carried Sita away
4. \_\_\_\_\_ is our Pujya Guruji.
5. We should \_\_\_\_\_ our elders .

Q. 2 Answer the following

[3 X 3 = 9]

1. Name two ways in which you can help a poor child.

---

---

---

---

---

2. Write a short note on Devotion.

---

---

---

---

---

- What do you learn from the story , Lord Rama and the Squirrel?

---

---

---


---

---

Q.3 Complete the following.

[ 6 ]

We live \_\_\_\_\_ the noble life of \_\_\_\_\_ and \_\_\_\_\_ producing  
\_\_\_\_\_ than what we \_\_\_\_\_ and giving more than what we \_\_\_\_\_.





CHINMAYA VIDYALAYA TARAPUR

P-201, M.I.D.C. Indl. Area, Saravali, Boisar

EVALUATION -III- 2018-19

Sub: Information Technology

Std:IV

Marks - 40

Name : \_\_\_\_\_

Roll No - \_\_\_\_\_

Q1. Choose the correct answer from the given options and fill in the blanks:[5x 1=5]

- The \_\_\_\_\_ bar helps you to scroll the contents of the document.  
a) menu bar                      b) scroll                      c) title bar
- The shortcut key used to run a slide show is \_\_\_\_\_.  
a) F3                      b) F7                      c) F5
- 3D Studio Max software is used to create \_\_\_\_\_.  
a) presentation                      b) 3D animation                      c) drawings
- You need to hold the \_\_\_\_\_ key with the letter to type that letter in capital.  
a) shift                      b) tab                      c) enter
- The \_\_\_\_\_ shows the name of the documents you are currently working on.  
a) menu bar                      b) title bar                      c) scroll bar

Q.2. Fill in the blanks:

[ 5 x 1=5]

- The \_\_\_\_\_ is the area in the document window where you type the text.
- \_\_\_\_\_ tab is used to apply a theme to the slides.
- The \_\_\_\_\_ is a round button on the top most left corner of the window with Microsoft Office logo on it.
- A \_\_\_\_\_ is a series of slides which includes photos, clips, pictures, sound and writing on a particular topic or subject.
- \_\_\_\_\_ is an application that is a combination of text, sound, video, animation, still images and graphics.

Q.3 Guess the correct word and write in the blanks.

[ 5 X 1 = 5]

- A software used to create graphics. - \_\_\_\_\_
- The key used to delete a character before the cursor.- \_\_\_\_\_
- A software used to create presentation. - \_\_\_\_\_
- A blinking line on the document. - \_\_\_\_\_
- The button which has various options like New, Open, Save. \_\_\_\_\_

Q.4 Answer the following questions:

[6X2=12]

1. What is a paragraph?

\_\_\_\_\_

\_\_\_\_\_

\_\_\_\_\_

2. What is Windows Media Player?

---

---

3. Write the steps to run a presentation.

---

---

---

4. What is animation?

---

---

---

5. Name any two multimedia games.

---

---

6. Name any four components of MS-Word 2007.

---

---

**Q.5 Answer the following questions:**

[ 3X3=9]

1. Write any three features of MS-Word.

---

---

---

---

---

---

---

---

2. What is MS-Powerpoint used for?

---

---

---

---

3. Write a short note on Slides and Notes.

---

---

---

---

---

---

---

---

Q.6 Label the parts of MS-PowerPoint window.

[ 4 X 1=4 ]

